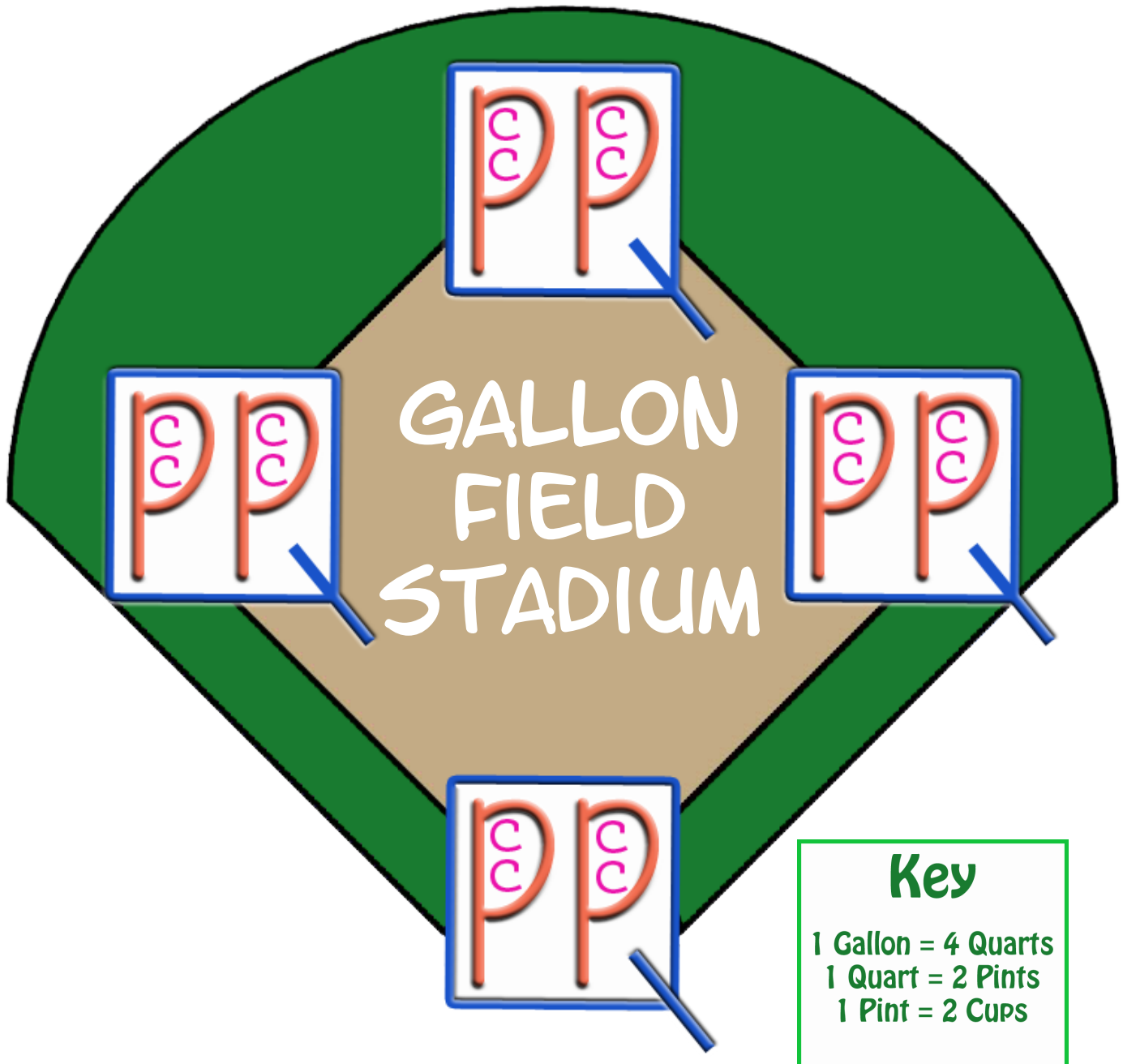
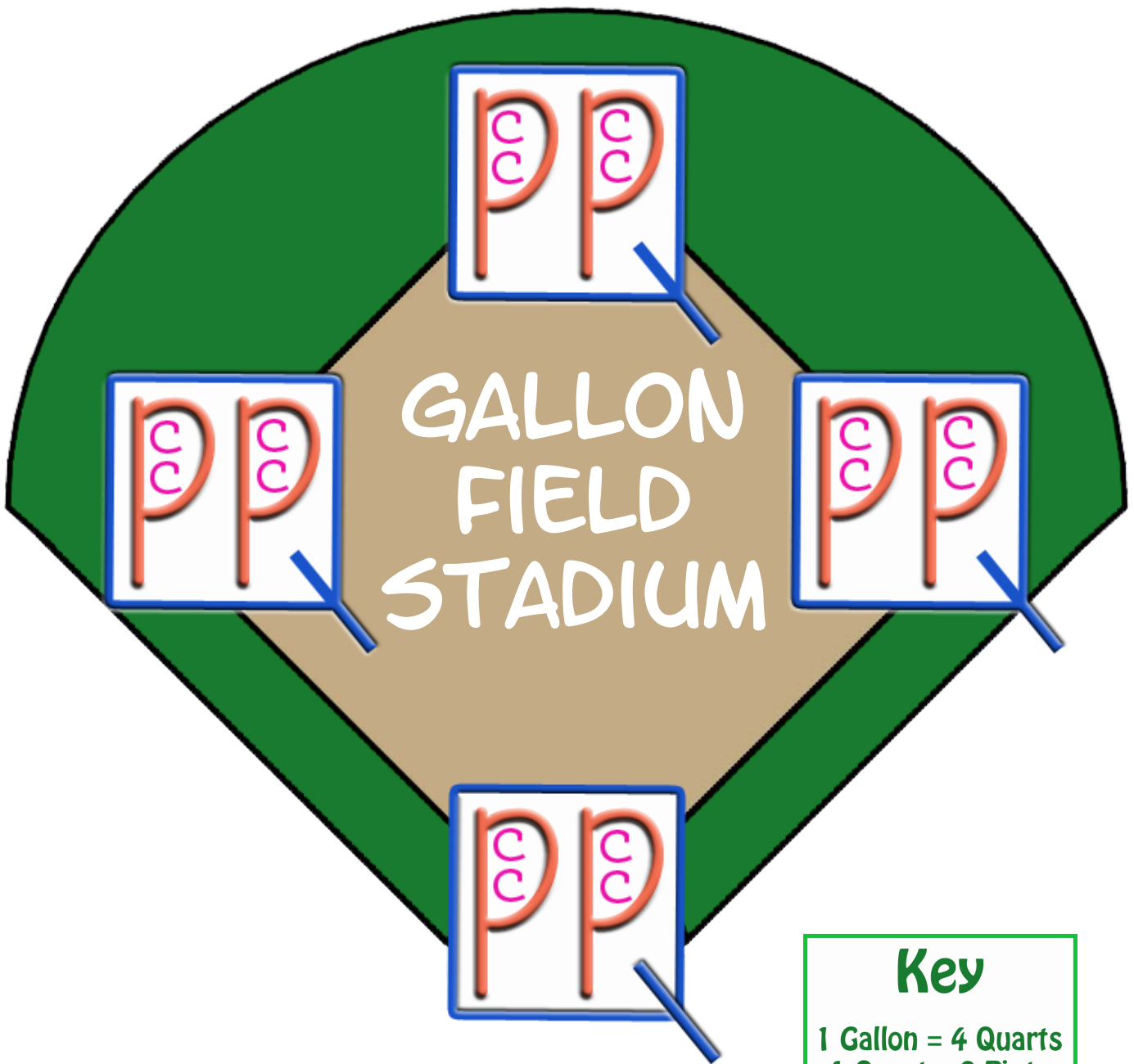


Gallon Field Stadium

The "Gallon Field Stadium" image is used throughout the **Brandon Jones and the Great Business of Summer** book and workbook as a teaching aid to visualize the concept of liquid conversion. Using this graphic provides learners with a method of quickly recalling the cups-to-gallon conversion standard.

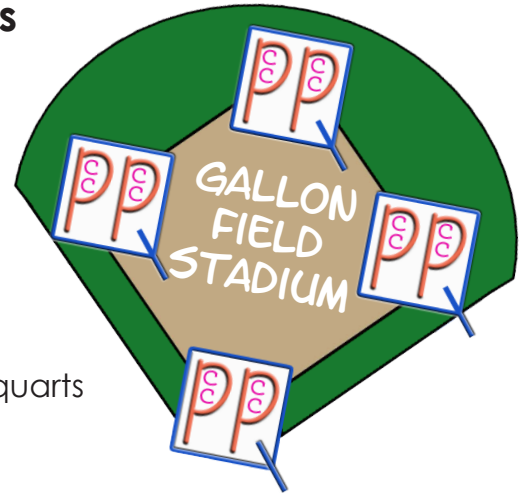


Gallon Field Stadium



Liquid Conversions

Directions: Solve each problem. Use the Gallon Field Stadium drawing to help find the correct answer.



1. Brandon has 3 gallons of lemonade. Help him figure out how many cups, pints, and quarts he has in all.

3 gallons = _____ cups = _____ pints = _____ quarts

2. Gabe sold 32 cups of lemonade in one hour. How many pints, quarts, and gallons did he sell in all?

32 cups = _____ pints = _____ quarts = _____ gallons

3. 6 cups = _____ pints
_____ quarts

4. 7 pints = _____ cups
_____ quarts

5. 3 quarts = _____ cups
_____ pints

6. 1 1/2 gallons = _____ pints
_____ quarts

Directions: Compare. Write <, >, or =.

7. 4 pints _____ 2 quarts

8. 3 pints _____ 8 cups

9. 3 cups _____ 1 pint

10. 1 gallon _____ 6 quarts

11. 1 quart _____ 4 cups

12. 12 cups _____ 7 pints